


Answer on Question #74937, Physics / Mechanics | Relativity

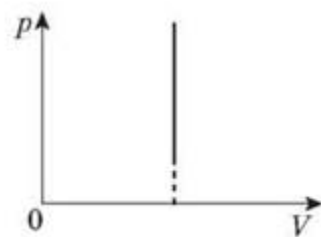
Represent the following processes on the p-V diagrams: i) isobaric, ii) isochoric, iii) isothermal, iv)

Answer:

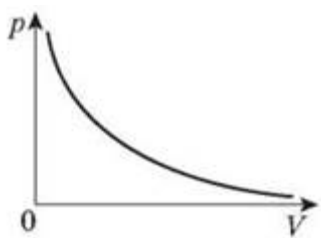
i)



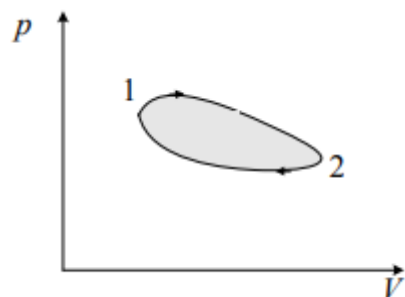
ii)



iii)



iv)



Answer provided by <https://www.AssignmentExpert.com>